



Determine if the angle shown is 'less', 'more' or 'equal' to 90°.

Answers

Ex)



1)



2)



Ex. less

1. \_\_\_\_\_

2. \_\_\_\_\_

3)



4)



5)



3. \_\_\_\_\_

4. \_\_\_\_\_

6)



7)



8)



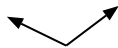
6. \_\_\_\_\_

7. \_\_\_\_\_

9)



10)



11)



9. \_\_\_\_\_

10. \_\_\_\_\_

11. \_\_\_\_\_

12)



13)



14)



12. \_\_\_\_\_

13. \_\_\_\_\_

14. \_\_\_\_\_

15)



16)



17)



15. \_\_\_\_\_

16. \_\_\_\_\_

17. \_\_\_\_\_

18)



19)



20)




18. \_\_\_\_\_


19. \_\_\_\_\_


20. \_\_\_\_\_





Determine if the angle shown is 'less', 'more' or 'equal' to 90°.


Ex)  27°

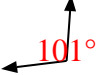
1)  90°


2)  105°


3)  18°


4)  90°

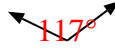
5)  77°


6)  101°


7)  90°


8)  102°


9)  78°


10)  117°


11)  90°


12)  165°


13)  15°


14)  47°


15)  90°

16)  142°

17)  109°

18)  90°

19)  90°

20)  90°

Answers

- Ex. less
1. equal
2. more
3. less
4. equal
5. less
6. more
7. equal
8. more
9. less
10. more
11. equal
12. more
13. less
14. less
15. equal
16. more
17. more
18. equal
19. equal
20. equal